



DIE ANKERSKOOI / SCHOOL



GAUTENG PROVINCE
EDUCATION
REPUBLIC OF SOUTH AFRICA



Naam en van : _____

Skill Level Prep 1(Girls): _____

Register onderwyser: _____




For office use


Date received: _____

Register teacher: _____

PREPARATORY



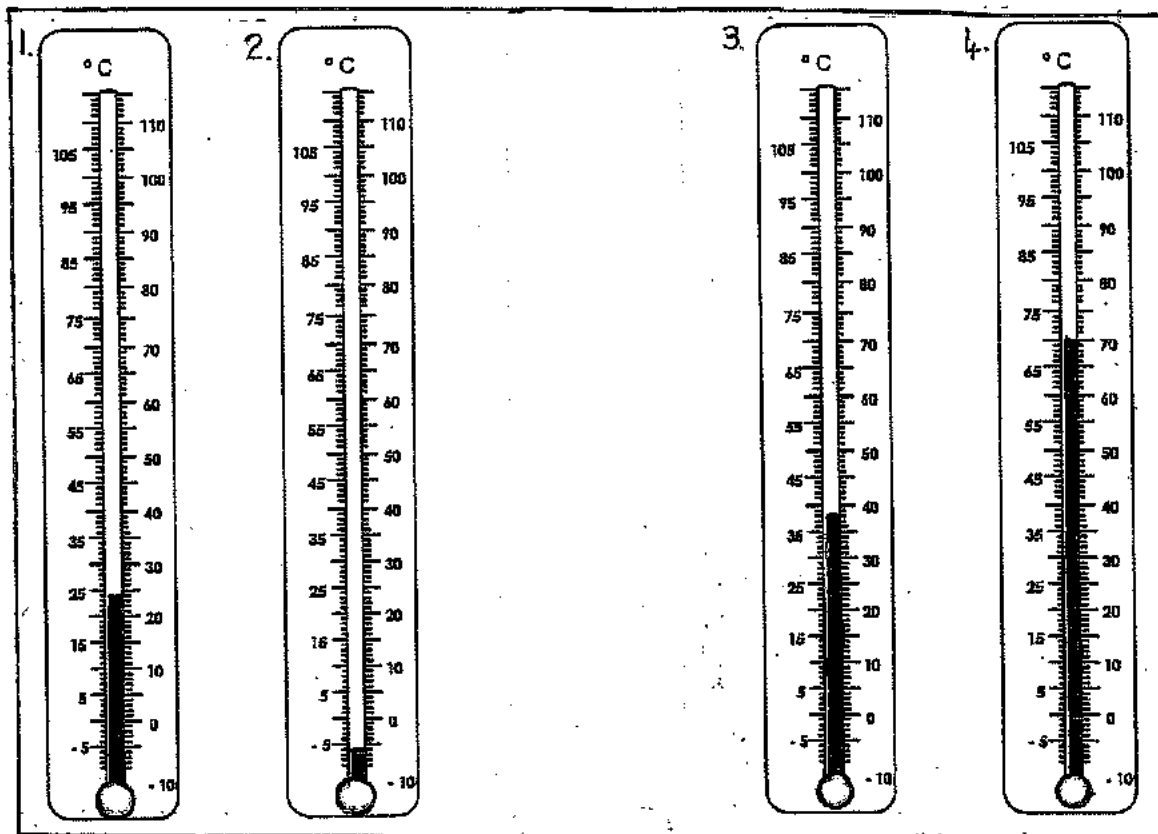
English Learners



Temperature

Read the temperature on the thermometer. Is it very cold, cold, hot or very hot.

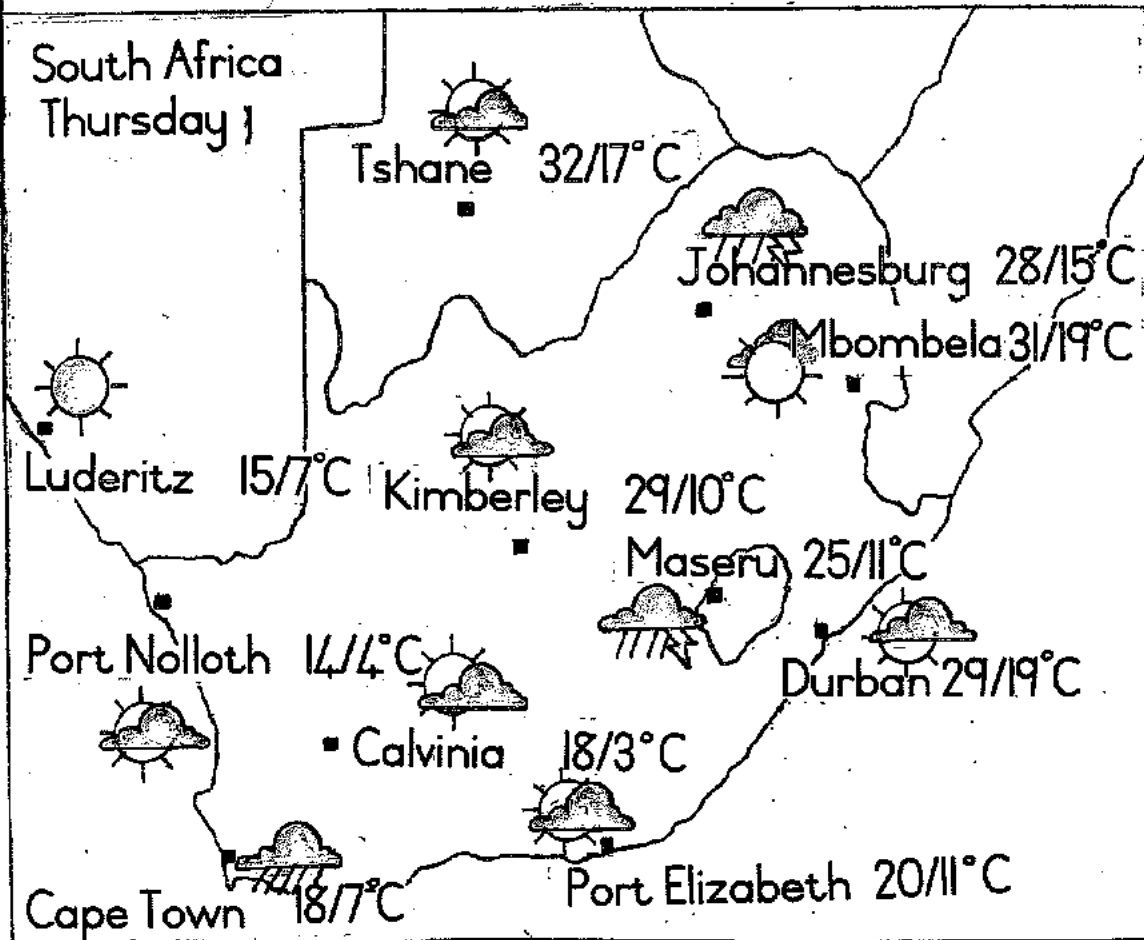
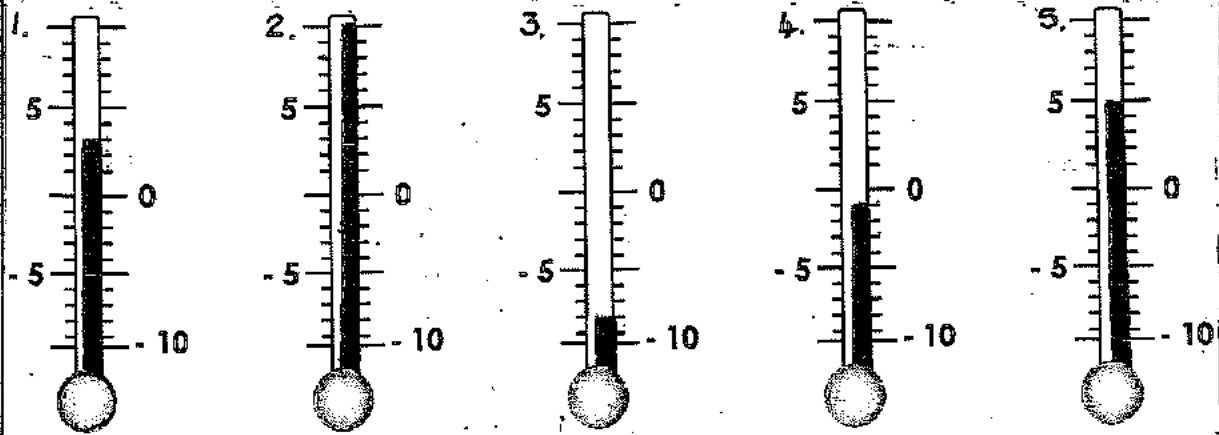
1. _____ 2. _____ 3. _____ 4. _____



1. Which temperature do you like most? _____
2. Why? _____

1. Which temperature is the coldest? _____

2. Which temperature is the hottest? _____



3. What is the temperature of: in: _____

a. Johannesburg _____ f. Calvinia _____

b. Mbombela _____ g. Port Nolloth _____

c. Kimberley _____ h. Cape Town _____

d. Durban _____

e. Port Elizabeth _____

What is a graph? (47)

A graph is a drawing or presentation of information or data.

The data enables us to see the outcomes or pros and cons of the information immediately.

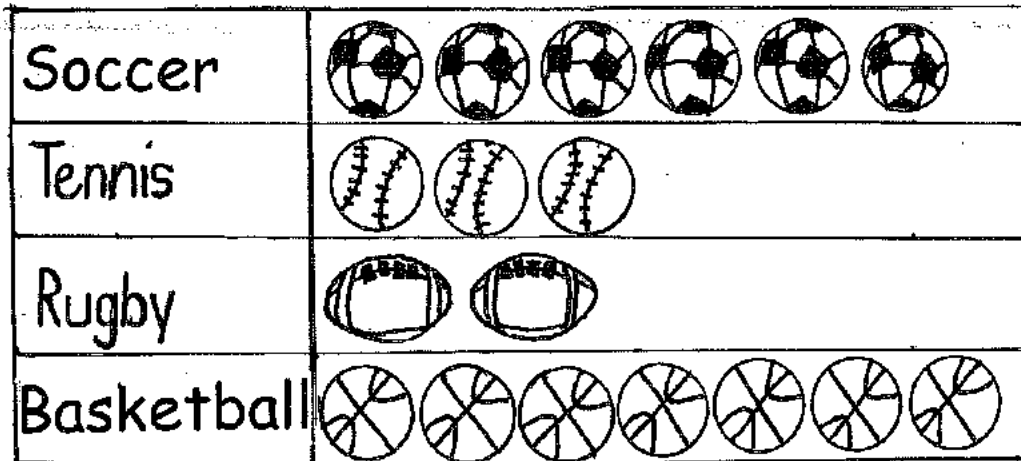
You get different types of graphs e.g.

1. Picture graphs (Pictograms)-this is where the data is represented by pictures.
2. Tally carts or tables-the information is counted by making a mark.
3. Bar graphs-this is where the information is represented by columns. (Vertical or horizontal)
4. Line graphs-this is where data is represented by lines. (like in a cricket game).
5. Circle graphs-this is where data is represented in a circle with different colours.

D. PICTOGRAM: (48)

Study the picture graph and answer the questions:

Our class' favourite picture graph



1. Write down how many kids like each sport.





2. Which sport does our class like the most?

3. Which sport is the least popular?

4. How many more learners like basketball than tennis? -----

1. Write down the correct meaning of the words in the column: (6)

	WORDS	MEANINGS
1.1	programme	activity you do to stay fit and healthy
1.2	upset	special sticks you use to help you walk
1.3	friendly	a show on radio or television
1.4	crutches 	being unhappy because something bad has happened
1.5	ingredients	being kind and welcoming to other people
1.6	exercise	food items you use to make a meal 

A sheet of lined paper with 24 horizontal lines. The lines are evenly spaced and run across the width of the page, leaving a margin at the top and bottom. The paper is otherwise blank.

2. Use the words in the above column to complete the sentences: (5)

- 2.1 I broke my legs and must use _____ for six weeks.
- 2.2 When my leg is better, I will do lots of _____ to get strong again.
- 2.3 My brother bought the _____ to make pancakes.
- 2.4 Sometimes, the girl next door is _____ and says hello, but often she is unfriendly.
- 2.5 I get _____ when people are rude to other people.

3. Use pronouns such as "I, it, us, them". to complete the sentences: (4)

- 3.1 My brother and _____ like watching television.
- 3.2 She gets cross with _____ when we watch too much television.
- 3.3 She likes reading books but we don't like reading ____ .
- 3.4 There is soccer on tonight but I don't like watching _____ .

Aktiwiteit 35

Lees die weerberig aandagtig deur en oefen om dit hardop te lees. Beantwoord dan die vrae

Die weerberig vir Krugersdorp vir hierdie week is as volg
Maandag sal dit gedeeltelik bewolk wees met 'n 80% kans vir laat middag donderstorms. Die minimum temperatuur sal 12°C wees en die maksimum temperatuur 20°C .

Dinsdag sal daar 'n 50% kans vir donderstorms wees met 'n minimum temperatuur van 13°C en 'n maksimum van 22°C .

Woensdag sal daar 'n 80% kans vir donderstorms wees met die minimum temperatuur van 13°C en 'n maksimum van 21°C .

Donderdag sal dit gedeeltelik bewolk wees met 'n minimum temperatuur van 13°C en 'n maksimum van 22°C .

Vrydag sal dit sonnig wees met 'n minimum temperatuur van 14°C en 'n maksimum van 25°C .

Sondag sal dit winderig wees met 'n minimum temperatuur van 13°C en 'n maksimum van 19°C .

Daar word sneeu verwag op die Drakensberge so maak seker om jou warm baadjie byderhand te hou.

1. Waartoor gaan die berig?

2. Wat sal die minimum temperatuur Donderdag wees?

3. Wat sal die maksimum temperatuur Dinsdag wees?

4. Gaan dit Woensdag gedeeltelik bewolk wees of gaan daar donderstorms wees?

5. Wat is die voorspelling vir Maandag?

6. Gaan dit Vrydag sonnig of bewolk wees?

7. Wat sal Saterdag se minimum en maksimum temperatuur wees?

8. Wat word daar op die Drakensberge verwag?

9. Lees die volgende sleutel woorde aandagtig deur.



Sonnig Gedeeltelik bewolk Reën Donderstorms Sneeu Winderig

10. Ondersreep die volgende woorde in die leesstuk.

10.1 Gebruik 'n blou potlood en onderstreep:

minimum , maksimum, temperatuur

10.2 Gebruik 'n groen potlood en onderstreep:

koud en warm.

10.3 Gebruik 'n oranje potlood en onderstreep:

sonnig, gedeeltelik bewolk, reën, donderstorms,

sneeu en winderig.

10.4. Gebruik 'n pers potlood en onderstreep:

Maandag, Dinsdag, Woensdag, Donderdag, Vrydag,
Saterdag en Sondag.

II. Maak nou 'n kollage van 'n sneeuman (knip prentjies uit
en plak dit om jou sneeuman te maak. Jy mag ook dele
van jou prentjie teken.

My sneeuman

My Cake Book

Year project 2020

Preparatory

- You need to design and make your own book with the different subject about cakes.
- The table below indicates the content of what you must have in your cake book.
- On the cover page you need to have the following information:

Name and Surname

Preparatory ____

Foodproduction

Year Project 2020

- Your recipe book must be in your own handwriting.
- The pictures are not allowed to be printed, you need to draw and colour them.
- You will get a mark at the end of each term for the project, this mark will then be your final mark at the end of the year.

Content of recipe book		
Description	Total	Mark
Cake recipes	5	
Cake themes (Pictures, A5)	10	
Cupcake recipes	5	
Cupcake themes (Picture, half of A5)	10	
Cake Fillings	3	
Icing Sugar recipes	5	
Cupcake cakes (Pictures, A5)	7	
Unique cakes (Pictures, A5)	5	
Total	50 recipe	

Other aspects of the recipe book		
Description		Mark
Index	5	
Pictures	10	
Colourful	20	
Overall seeing	5	
Total	40	
Final total	90	

