

JUFFROU
ASHLEY STEENKAMP

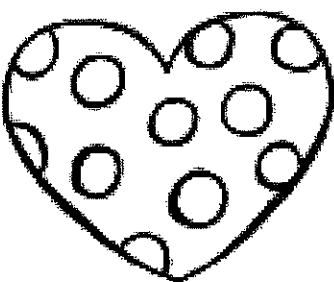


gedifferentieerde
graad 4.2 (gr.3)



MY LIFELINE


is spesiaal



ek mag

NEE

sê



Fill in the Sight Word

Name: _____

We are missing a word! Use the one that makes sense.

you

go

like

yes

in

the

play

We see ___ cup.

I will jump ___ mud.

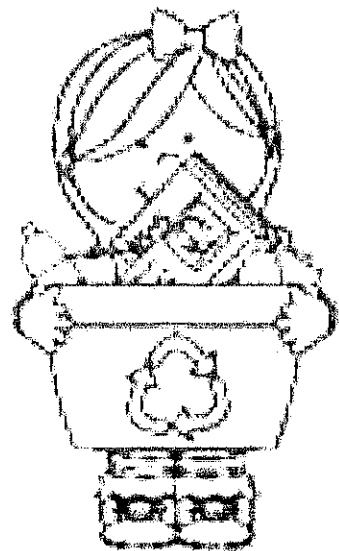
Can ___ play with me?

I ___ to help my mom.







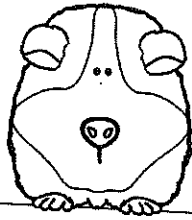



Will we ___ to the park?

____. I love my dad.

It is fun to ____ with dogs.



How do you care for your pet?



A place to stay and to sleep.

Food and water.



Love and attention

Clean his cage, pick up his toys and bath him.

Draw a picture of
your pet.

My pet


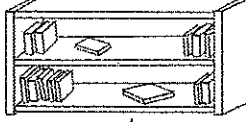




What is your pet's
name?

Draw 4 things you need to do to care for your pet. Then
write a caption below each drawing.

Ruimte en vorm

Aktiwiteit 1

1. Posisie en aanwysings. Bestudeer die kaart van die klaskamer en beantwoord die vrae.

	1	2	3	4	5
A			Boekrak 		
B					
C		Tafel 1 		Tafel 2 	
D		Tafel 3 		Tafel 4 	
E					

a. Wat is die posisies van die tafels? (4)

1. Tafel 1 - _____

2. Tafel 2 - _____

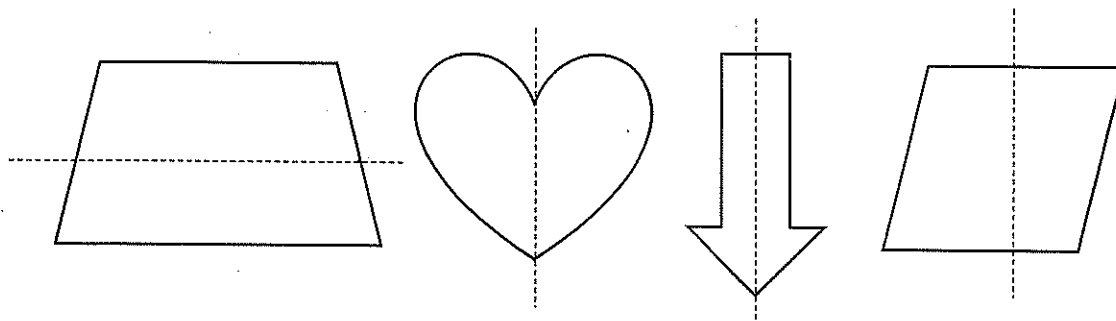
3. Tafel 3 - _____

4. Tafel 4 - _____

b. Wat is in A3 en A4? _____ (1)

- c. Waar is Juffrou se tafel geleë? _____ (1)
d. Hoeveel stoele is daar? _____ (1)
e. Teken 'n leeshoekie in E4 en E5. (2)

2. Maak 'n v op al die vorms waarvan die simmetrielyn korrek is.
(2÷2=1)



Totaal: Aktiwiteit 1 = ___/10

Verwerkte punt uit 20 (10x2) = ___/20